

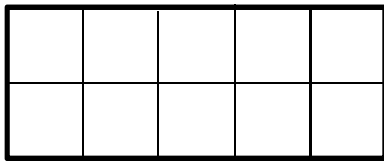
Name:

Date:.....

Perimeter and Area.

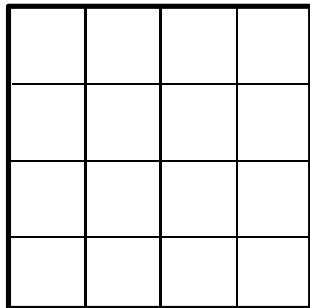
Each square has sides of length 1cm. 

Work out the perimeter and area of each of the following shapes.



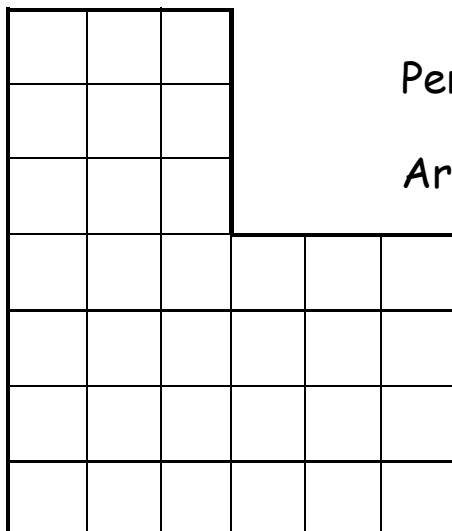
Perimeter: + + + =

Area =



Perimeter: + + + =

Area =



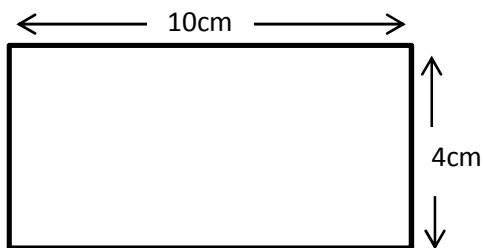
Perimeter: + + + + + =

Area =

Name:

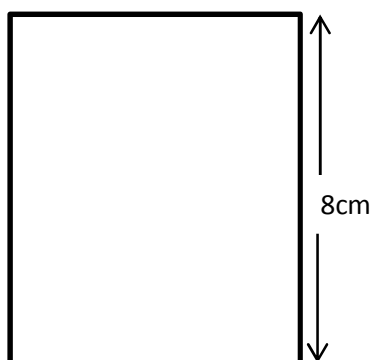
Date:.....

Can you find the missing lengths before working out the perimeter and area of the following shapes?



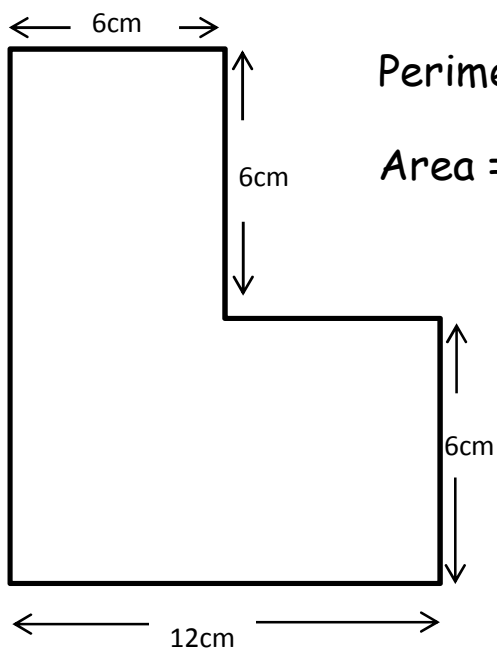
Perimeter: + + + =

Area =



Perimeter: + + + =

Area =



Perimeter: + + + + + =

Area =