





Name:.....

Date:.....





### Multiples mazes.

Tom has been asked to go shopping for food for his parents. They gave him a puzzle to find out what to buy. He needs to complete each of the four maze problems below. Can you follow and colour the multiples paths before completing the shopping list?





Multiples of 2.

	1	3	9	11	13	15	12	20	→ 
Start	2	6	7	8	16	14	18	19	→ 
	5	12	11	10	15	17	11	15	→ 
	7	4	14	12	19	15	17	20	→ 





Multiples of 3.

	3	6	12	11	14	27	33	36	→ 
Start	2	8	9	8	26	30	32	33	→ 
	5	13	15	12	17	24	28	25	→ 
	7	3	14	18	21	15	23	30	→ 

Multiples of 4.

	1	3	9	12	16	32	42	48	→ 
Start	4	6	7	8	18	40	34	36	→ 
	8	16	11	28	15	36	44	48	→ 
	7	12	24	20	19	38	27	40	→ 

Multiples of 5.

	3	6	12	15	25	30	33	36	→ 
	2	8	5	20	26	35	45	50	→ 
Start	5	10	15	12	17	24	28	44	→ 
	7	3	14	18	21	15	23	30	→ 

Now complete the shopping list.

Shopping List.

.....

.....

.....

.....