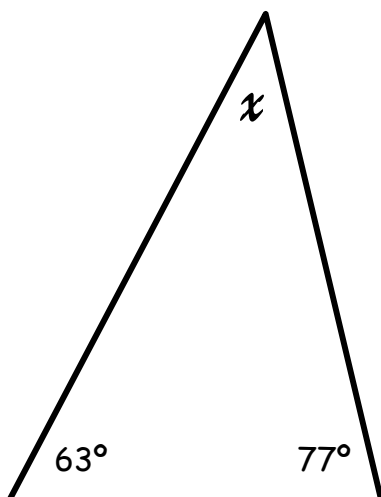
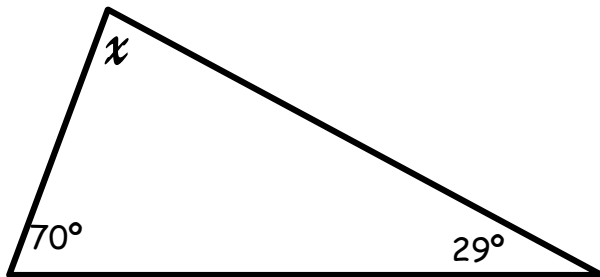
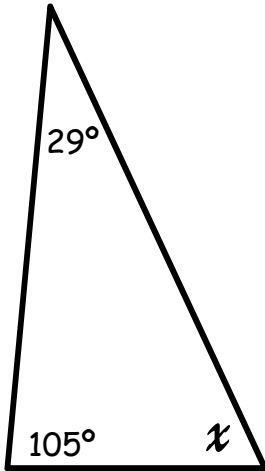


Name:

Date:

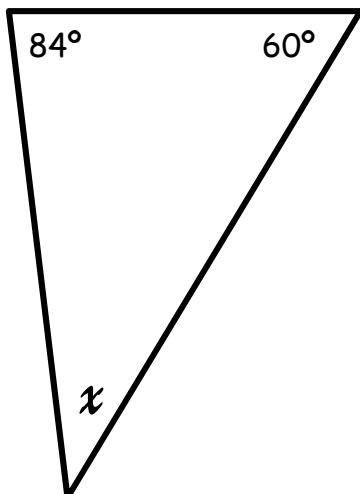
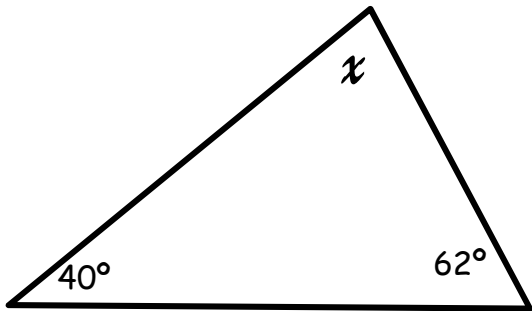
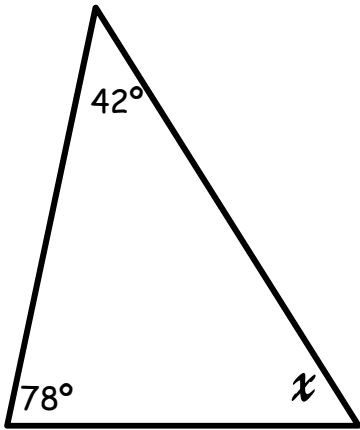
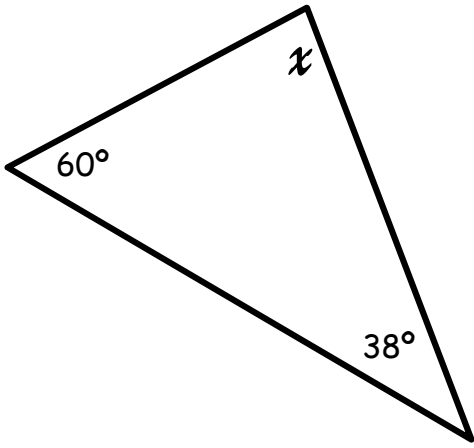
Angles in triangles.

Calculate the missing angles in each of the following triangles.



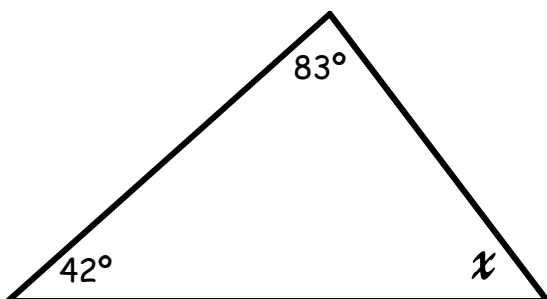
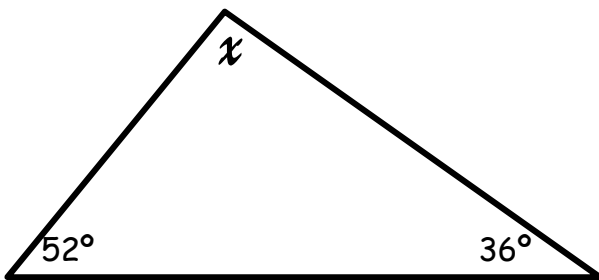
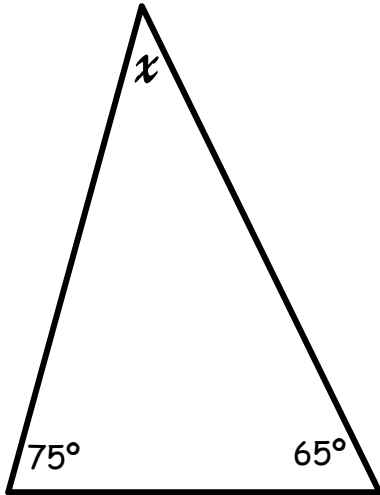
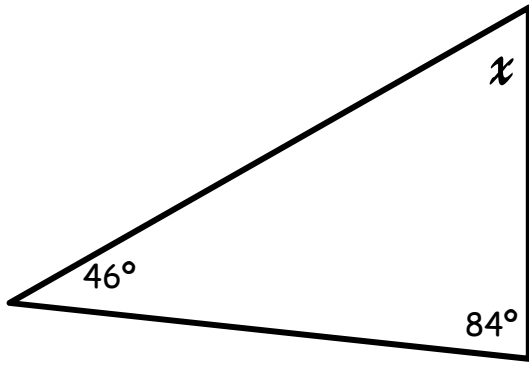
Name:

Date:



Name:

Date:



Answer Sheet.

1) $180^\circ - 105^\circ - 29^\circ = 46^\circ$

2) $180^\circ - 70^\circ - 29^\circ = 81^\circ$

3) $180^\circ - 77^\circ - 63^\circ = 40^\circ$

4) $180^\circ - 60^\circ - 38^\circ = 82^\circ$

5) $180^\circ - 78^\circ - 42^\circ = 60^\circ$

6) $180^\circ - 62^\circ - 40^\circ = 78^\circ$

7) $180^\circ - 84^\circ - 60^\circ = 36^\circ$

8) $180^\circ - 84^\circ - 46^\circ = 50^\circ$

9) $180^\circ - 75^\circ - 65^\circ = 40^\circ$

10) $180^\circ - 52^\circ - 36^\circ = 92^\circ$

11) $180^\circ - 83^\circ - 42^\circ = 75^\circ$