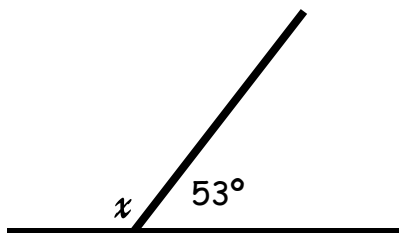


Name:

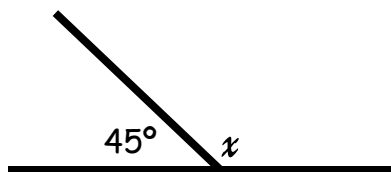
Date:

Angles on a straight line.

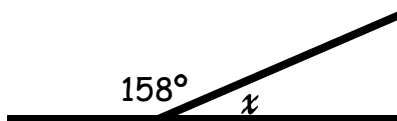
Calculate the missing straight line angles.



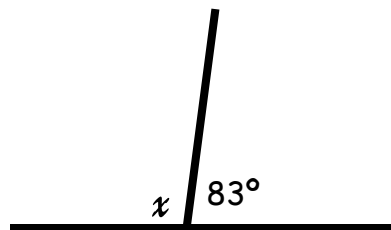
Angle $x =$



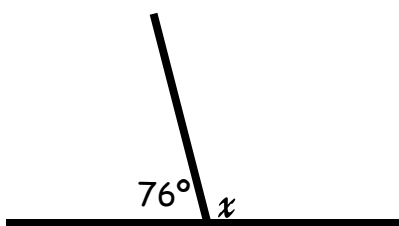
Angle $x =$



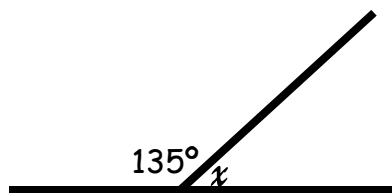
Angle $x =$



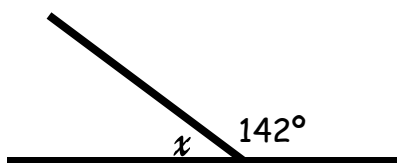
Angle $x =$



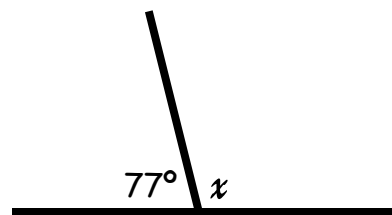
Angle $x =$



Angle $x =$



Angle $x =$



Angle $x =$

Answer Sheet.

1) $180^\circ - 53^\circ = 127^\circ$

2) $180^\circ - 45^\circ = 135^\circ$

3) $180^\circ - 158^\circ = 22^\circ$

4) $180^\circ - 83^\circ = 97^\circ$

5) $180^\circ - 76^\circ = 104^\circ$

6) $180^\circ - 135^\circ = 45^\circ$

7) $180^\circ - 142^\circ = 38^\circ$

8) $180^\circ - 77^\circ = 103^\circ$