

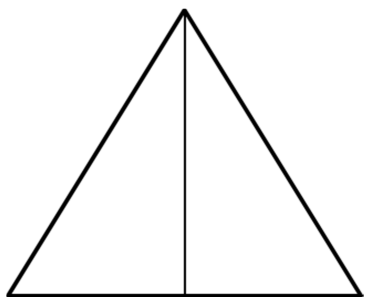
Name:.....

Date:.....


Fractions

Shade one part of each shape.

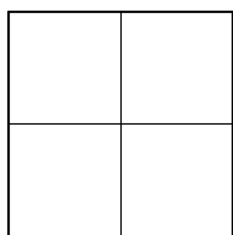
Draw a line from each shape to the matching fraction.




$\frac{1}{4}$ one quarter



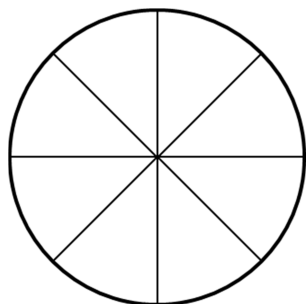
$\frac{1}{2}$ one half




$\frac{1}{6}$ one sixth



$\frac{1}{3}$ one third



$\frac{1}{10}$ one tenth



$\frac{1}{8}$ one eighth